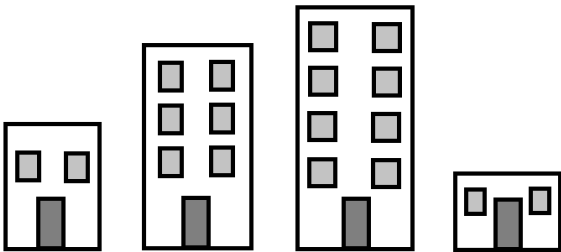


Name: \_\_\_\_\_

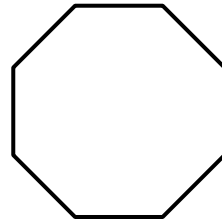
1) What number is in the ones place of 62?

2) I bought some plums. I ate 2 and now there are 6 left. How many plums did I buy?

3) Circle the tallest building.



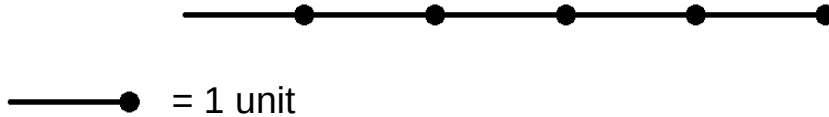
4) How many corners does this shape have?



5) Complete the pattern:




6) How many units long is this line?

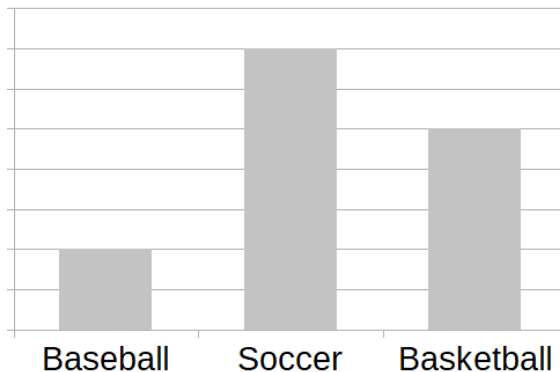


7) When reading the time digitally, does the hours or the minutes come first?

8) Divide into halves.



9) Which sport is the most popular?



10) Find the missing number.

$$5 + \square = 9$$

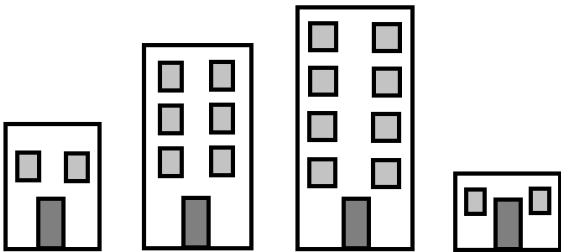


Name: \_\_\_\_\_

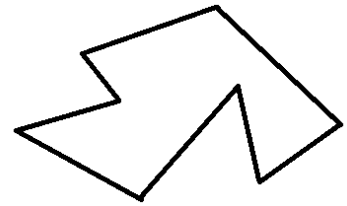
1) Write the number fifteen.

2) I have 8 pears and 12 oranges. How many fewer pears than oranges do I have?

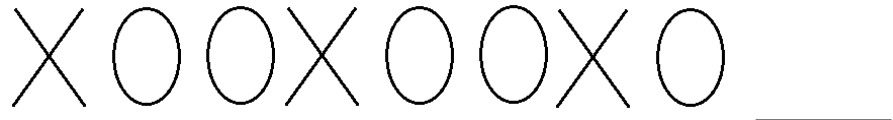
3) Circle the shortest building.



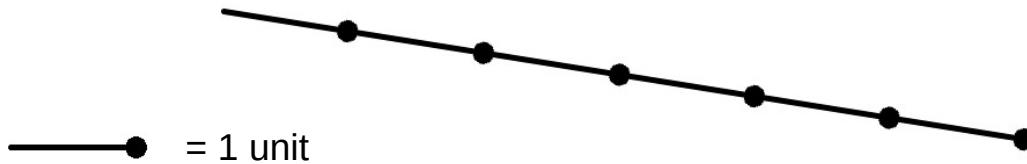
4) How many edges does this shape have?



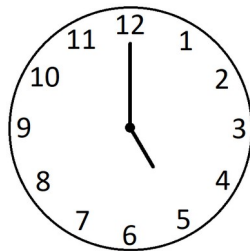
5) Complete the pattern:




6) How many units long is this line?



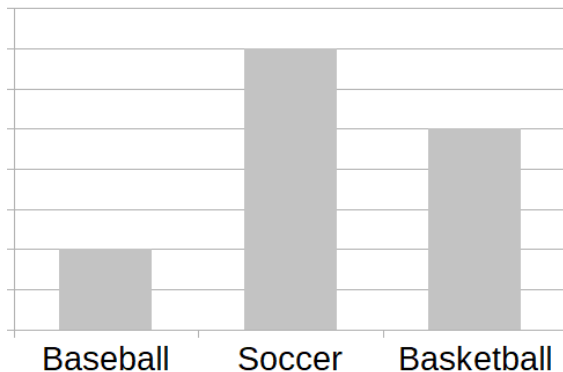
7) What time is it?



8) Divide into halves.



9) Which sport is the least popular?



10) Add..

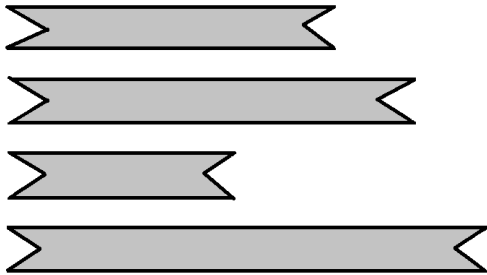
$$4 + 8 + 3 + 2 + 6 =$$

Name: \_\_\_\_\_

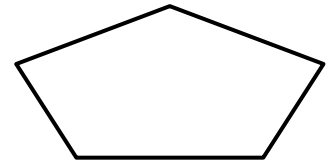
1) What number is in the tens place of 156?

2) There are 6 people in a shop. A group of 3 people enter the shop, then another group of 4 people come in. How many people are now in the shop?

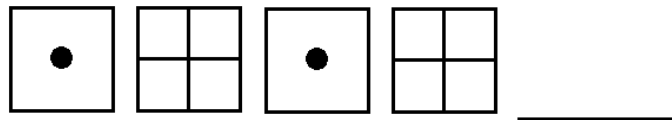
3) Circle the shortest ribbon.



4) How many angles does this shape have?

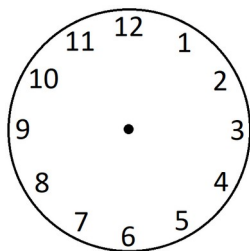


5) Complete the pattern:



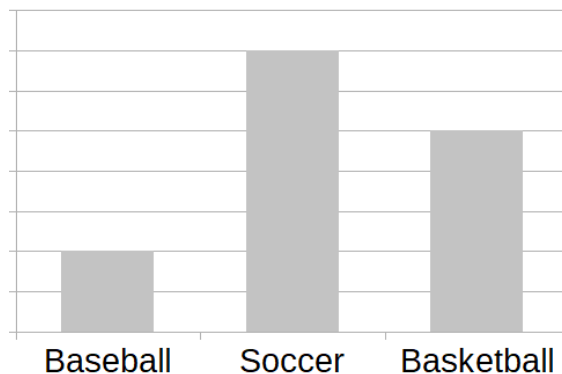
6) What does a ruler measure?

7) Show 3 o'clock on the clock face.



8) What is one half of 6?

9) Do more people like baseball or basketball?



10) Find the missing number.

$$\begin{array}{r} 7 \\ + \square \\ \hline 12 \end{array}$$

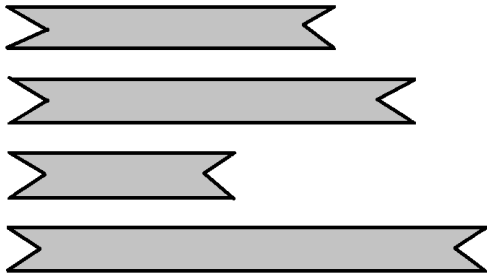
ResearchParent

Name: \_\_\_\_\_

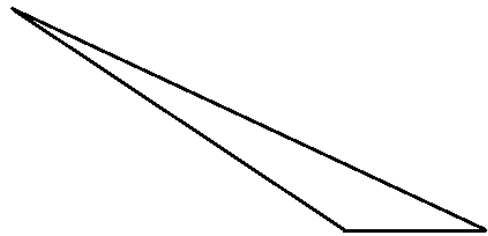
1) Write the number seventy one.

2) I live on the 11<sup>th</sup> floor of my building. There are 4 floors above me. How many floors does my building have?

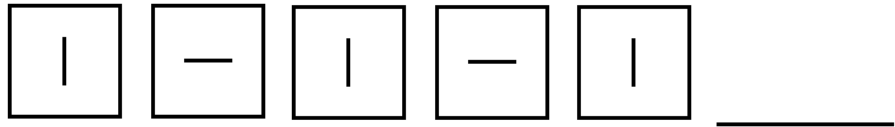
3) Circle the longest ribbon.



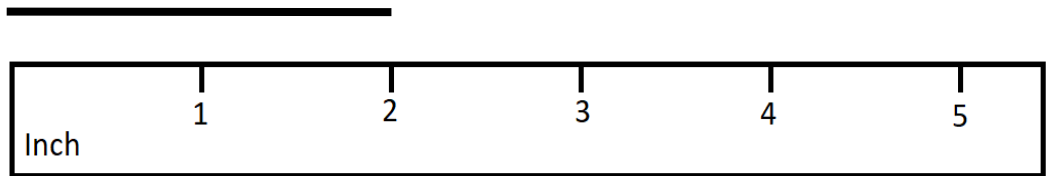
4) What type of shape is this?



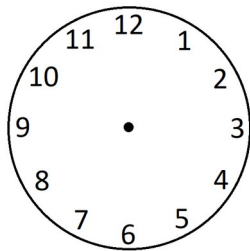
5) Complete the pattern:



6) How many inches long is the line below?

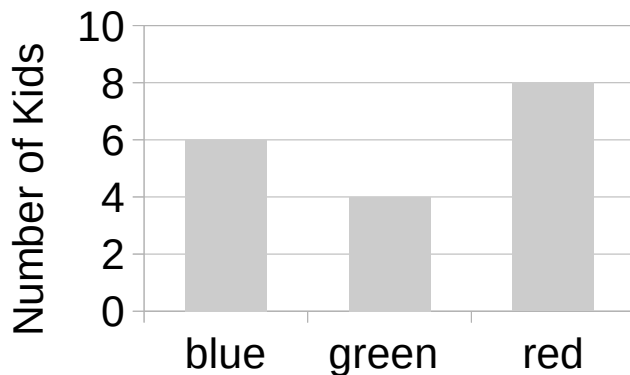


7) Show 7:00 on the clock face.



8) What is one half of 10?

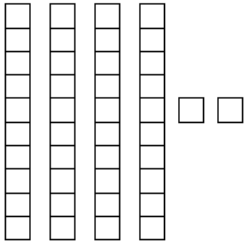
9) Which color is the most popular?



10) What number is one more than 49?

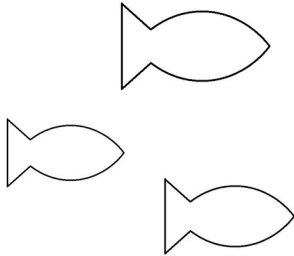
Name: \_\_\_\_\_

1) How many squares are there?

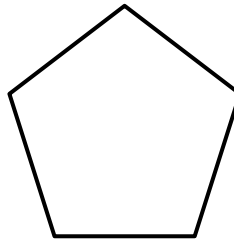


2) I am 12<sup>th</sup> from the front of the line and my brother is 2 people in front of me. What number from the front is he?

3) Circle the highest fish.



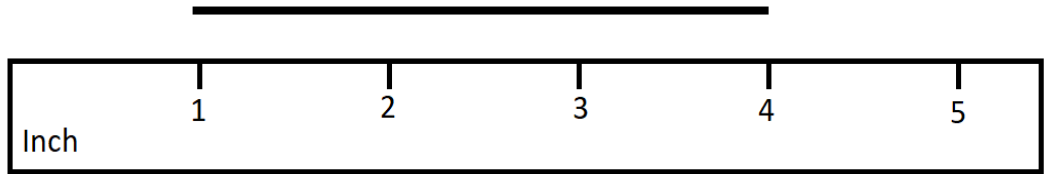
4) What type of shape is this?



5) Complete the pattern:

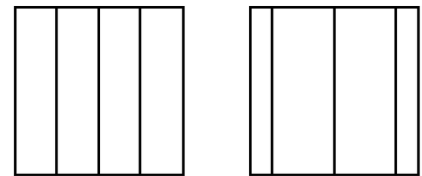


6) How many inches long is the line below?

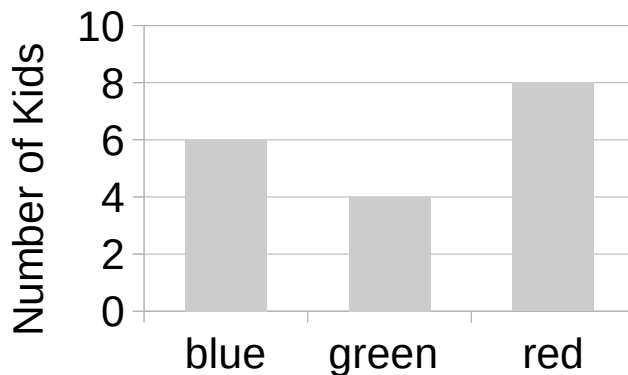


7) How many minutes are in an hour?

8) Which square has equal size pieces?



9) How many kids chose blue?



10) Add.

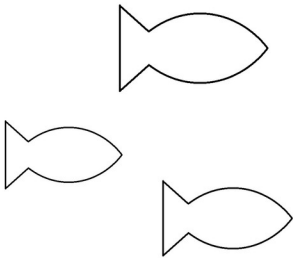
$$\begin{array}{r} 25 \\ + 13 \\ \hline \end{array}$$

Name: \_\_\_\_\_

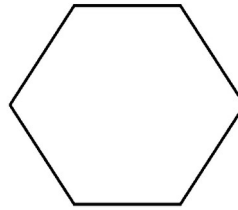
1) What number is one more than 39?

2) There are 8 people in front of me in line and 12 people behind me. How many people are in line?

3) Circle the lowest fish.



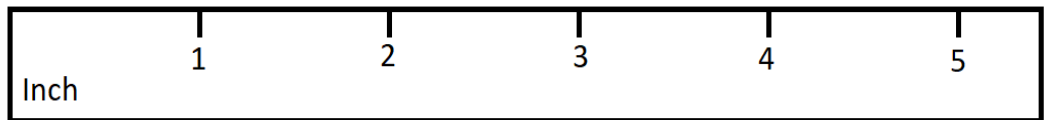
4) What type of shape is this?



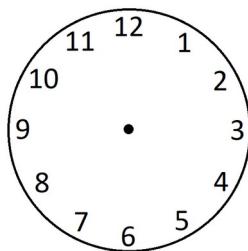
5) Complete the pattern:



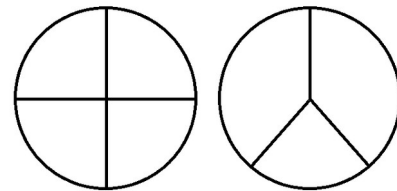
6) Draw a 4 inch line segment:



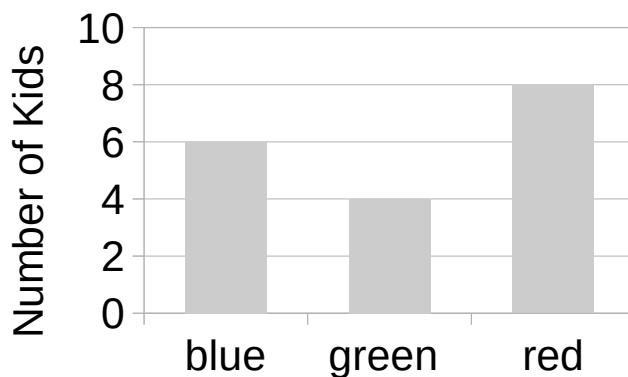
7) Show half past 4 on the clock.



8) Which circle has equal size pieces?



9) How many kids chose green?




10) What number is one more than 99?

Name: \_\_\_\_\_

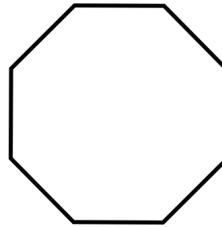
1) What number is one less than 80?

2) If I am 12<sup>th</sup> from the front of the line and 10<sup>th</sup> from the back of the line, how many people are in line?

3) Circle the square in the middle.



4) What type of shape is this?



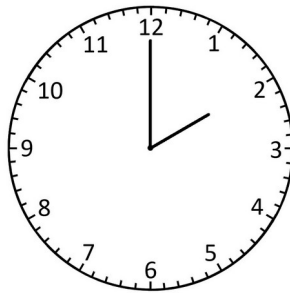

5) Complete the pattern:




6) How long is this line segment in centimeters?



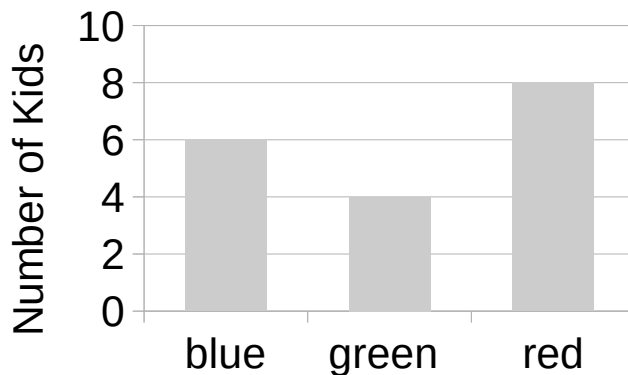
7) Write the digital time.



8) Divide into fourths.



9) How many kids chose red?



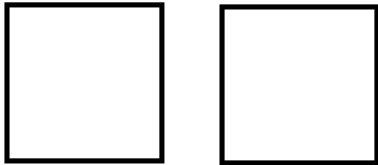
10) What number is ten more than 32?

Name: \_\_\_\_\_


1) What number is ten more than 67?

2) There are 30 kids and 24 hats. If every kids wants a hat, how many more hats are needed?

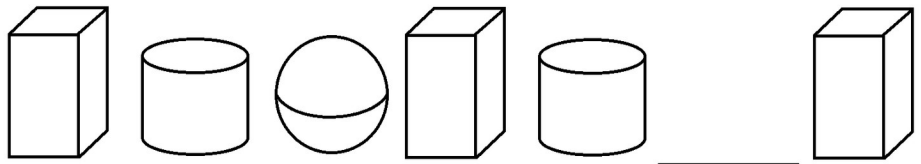
3) Circle the square on the right.



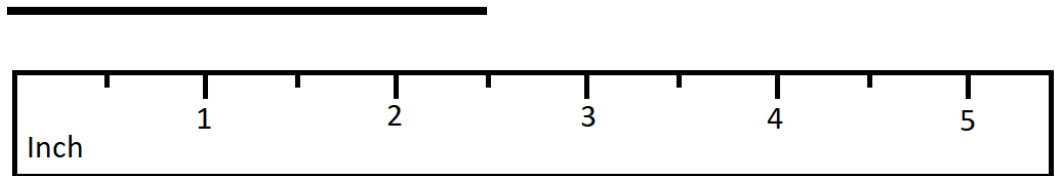
4) Draw a line of symmetry.



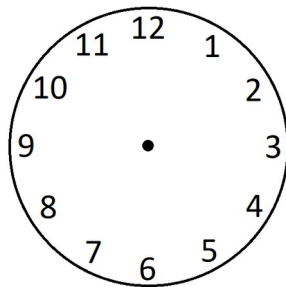
5) Complete the pattern:



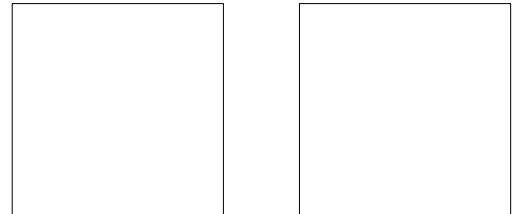
6) How long is this line?



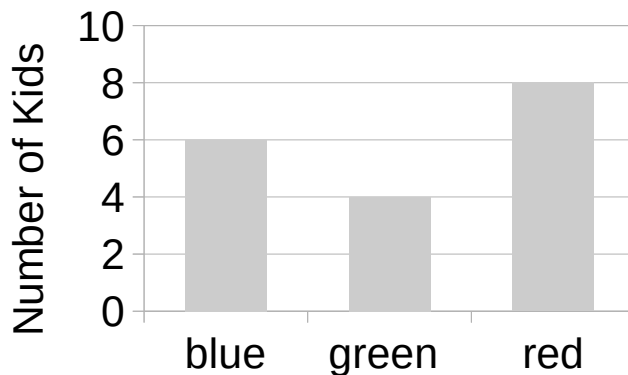
7) Show 9:30 on the clock face.



8) Show 2 different ways to divide a square into fourths.



9) How many more kids chose red than green?



10) Subtract.

$$\begin{array}{r} 84 \\ - 63 \\ \hline \end{array}$$

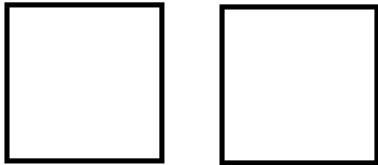


Name: \_\_\_\_\_

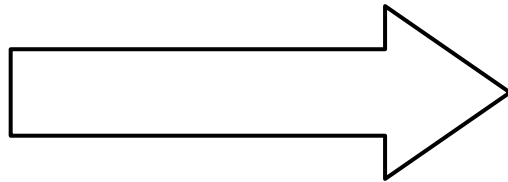
1) What number is ten less than 42?

2) I had 12 crayons. My friend gave me 6 more, then my brother gave me 9. Now how many crayons do I have?

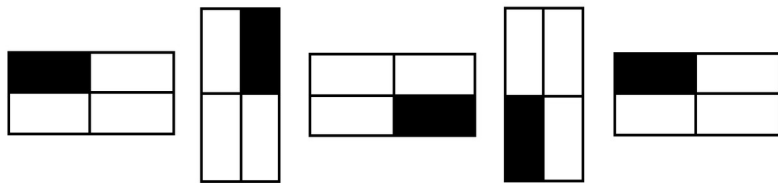
3) Circle the square on the left.



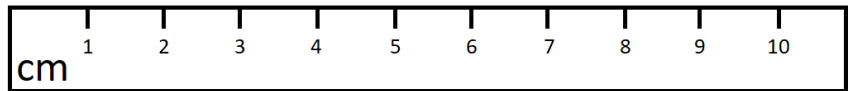
4) Draw a line of symmetry.



5) Complete the pattern:




6) How long is this line?

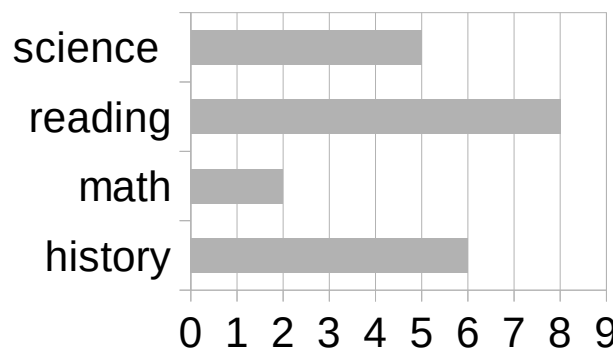


7) How many hours are in a day?

8) Which rectangle is divided into thirds?



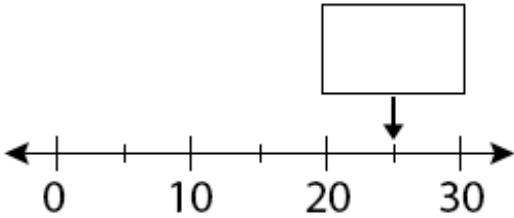
9) How many kids chose history?



10) What number is 2 less than 80?


Name: \_\_\_\_\_

1) What number is missing?




2) There were 15 cows in a field. The farmer then brought 22 more. Now how many cows are in the field?

3) Draw a circle to the left of the square.



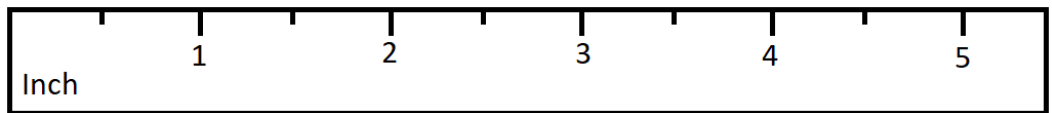
4) Draw a line of symmetry.



5) Complete the pattern:

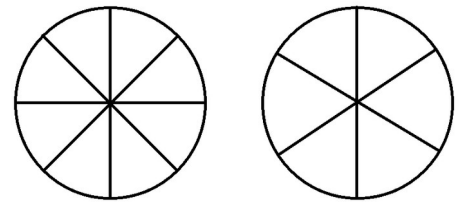


6) Draw a 3 1/2 inch line segment:

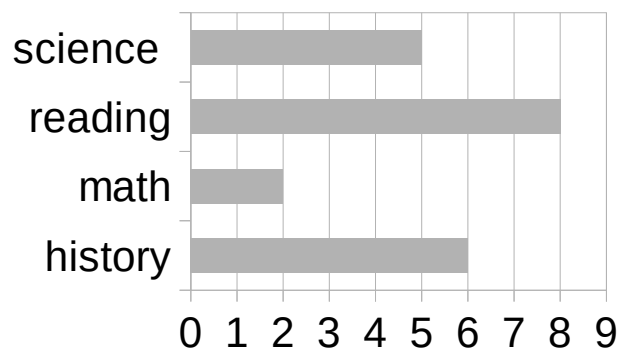


7) It is morning. Which is the correct label: am or pm?

8) Which circle is divided into eighths?



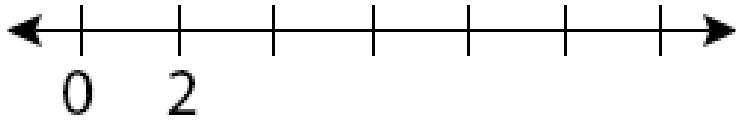
9) How many kids chose reading?



10) What is the difference between 34 and 40?


Name: \_\_\_\_\_

1) Complete the number line using even numbers.

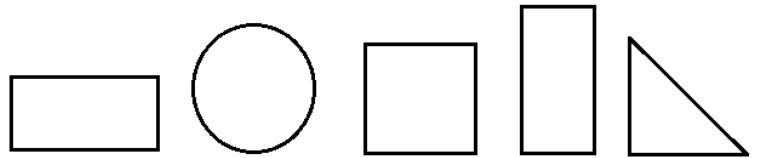


2) Some people were at a bakery. Nine people left and three more people came. How many fewer people are in the bakery now?

3) Draw a circle to the right of the square.



4) Which two shapes are congruent?



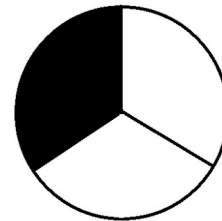
5) What number is missing?

4, 5, 6, \_\_\_\_\_, 8, 9

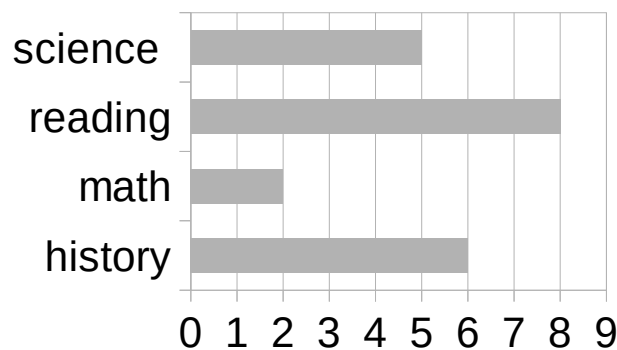
6) What does a thermometer measure?

7) It is afternoon. Which is the correct label: am or pm?

8) Write a fraction for the shaded amount.



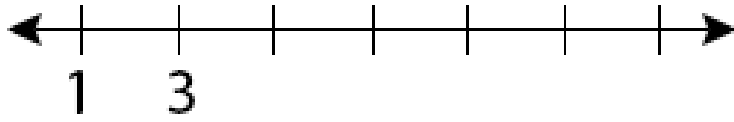
9) Do more kids like science or math?



10) What number is ten less than 65?

Name: \_\_\_\_\_

1) Complete the number line using odd numbers.

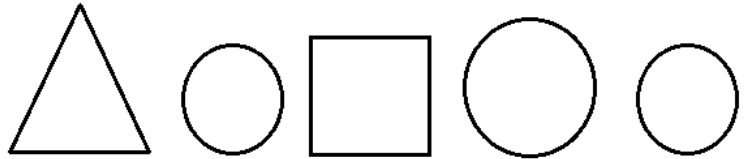


2) Some kids were at the park. Four kids left and 2 more came. Now there are 12 kids remaining. How many kids were there at first?

3) Circle the middle star.



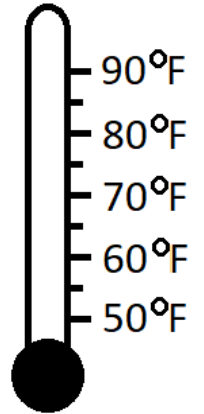
4) Which two shapes are congruent?



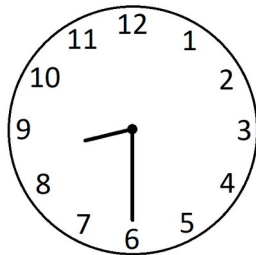
5) What number is missing?

10, 9, 8, 7, \_\_\_\_\_, 5, 4

6) Fill in the thermometer to show 70 °F.



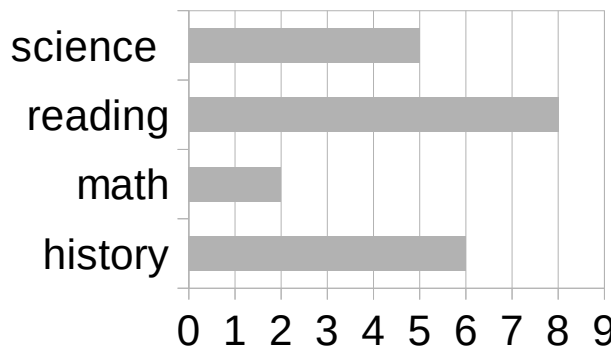
7) I am eating breakfast. What time is it? (Include am or pm.)



8) Write a fraction for the shaded amount.



9) How many fewer kids chose science than history?



10) What number is 3 less than 101?


Name: \_\_\_\_\_

1) How many tally marks are there?




2) There are 14 kids in line and I am 10<sup>th</sup> from the front. What number am I from the back?

3) Circle the middle square.



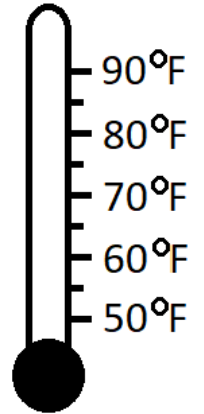
4) Which two shapes are congruent?



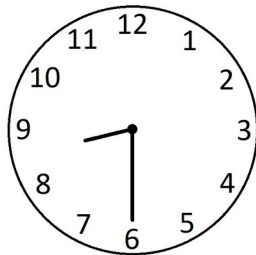
5) What number is missing?

20, 21, 22, \_\_\_\_\_, 24, 25

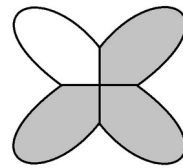
6) Fill in the thermometer to show 85 °F.



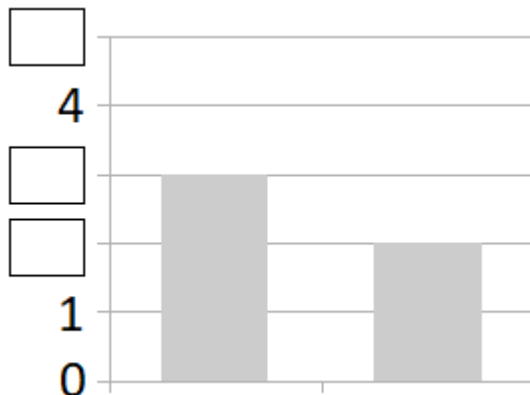
7) I am going to bed.  
What time is it?  
(Include am or pm.)



8) Write a fraction for the shaded amount.



9) Fill in the missing numbers on the vertical axis.



10) Find the missing number.

$$\square - 8 = 16$$

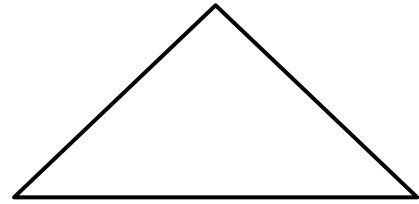
Name: \_\_\_\_\_

1) Write the number 16 using tally marks.

2) The pizza was cut into 12 slices. I ate 3 slices and my brother ate 5. Now how many slices are left?

3) How do you say ordinal number, 1<sup>st</sup>?

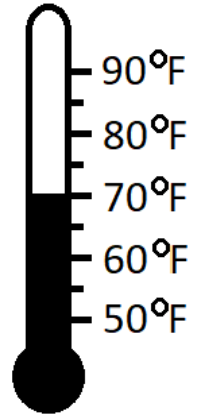
4) Draw a line to make this shape into 2 triangles.



5) What number is missing?

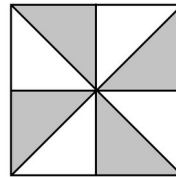
99, 98, \_\_\_\_\_, 96, 95

6) Read the thermometer to find the temperature.

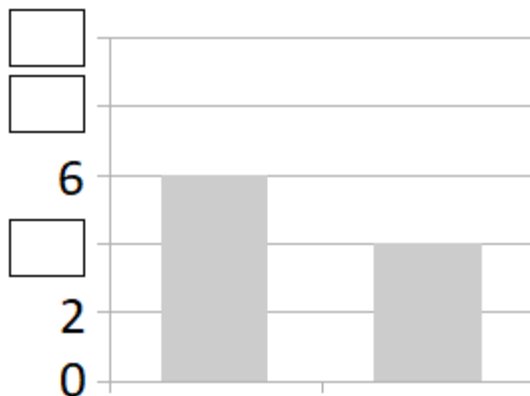


7) Is 9:15 pm in the morning or evening?

8) Write a fraction for the shaded amount.



9) Fill in the missing numbers on the vertical axis.



10) What is the value of x?

$$5 + x = 2 + 5$$

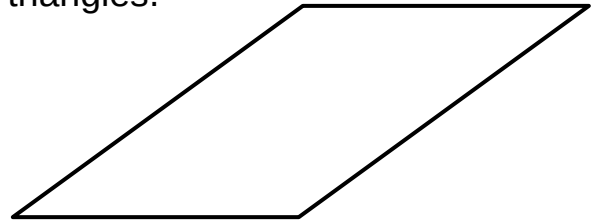
Name: \_\_\_\_\_

1) Write the fact family for the numbers 4, 7, and 11.

2) I read 35 pages of my book. Now I have 17 pages remaining. How many pages long is my book?

3) How do you say the ordinal number, 4<sup>th</sup>?

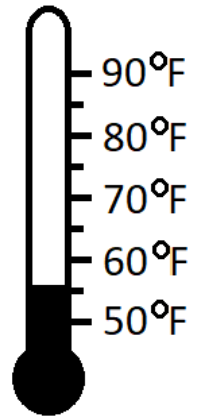
4) Draw a line to make this shape into 2 equal triangles.



5) What number is missing?

6) Read the thermometer to find the temperature.

\_\_\_\_, 36, 37, 38, 39

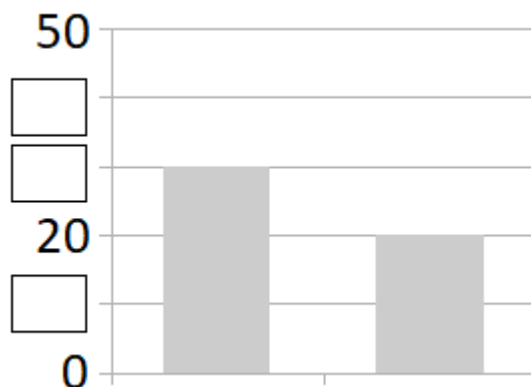


7) Is 7:20 am in the morning or evening?

8) Write a fraction for the shaded amount.



9) Fill in the missing numbers on the vertical axis.



10) What is the value of  $\triangle$  ?

$$\square + \square + \triangle + \triangle = 16$$
$$\square + \square + \square = 15$$

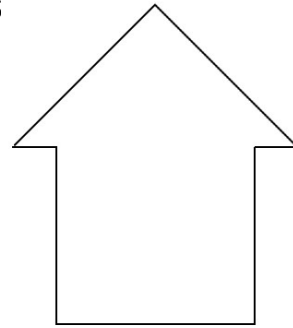
Name: \_\_\_\_\_

1) Write the number seven hundred twenty one.

2) Fourteen people were on the bus. Eight got off and twelve more got on. Now how many people are on the bus?

3) How do you say the ordinal number, 13<sup>th</sup>?

4) Draw 2 lines to make this shape into 3 equal triangles



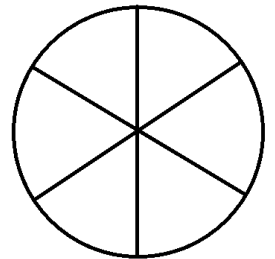
5) What number is missing?

\_\_\_\_, 23, 22, 21, 20

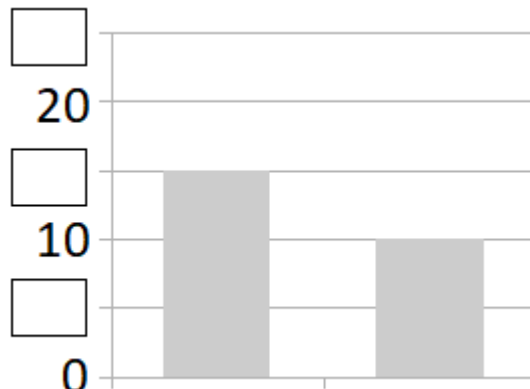
6) If it is 90 °F outside, is that hot or cold?

7) If it is 9 am, what time was it 2 hours ago?

8) Shade  $\frac{1}{6}$  of the circle.



9) Fill in the missing numbers on the vertical axis.



10) Add.

$$\begin{array}{r} 57 \\ + 25 \\ \hline \end{array}$$



Name: \_\_\_\_\_

1) Write the number four hundred eight.

2) I had 54 tokens, then I got 28 more. Now how many tokens do I have?

3) Write the ordinal number, "first," using a digit.

4) Draw 2 lines to make this shape into 3 equal triangles.



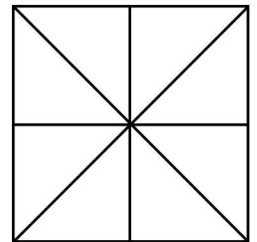
5) What number is missing?

46, 47, 48, 49, \_\_\_\_\_

6) If it is 30 °F outside, is that hot or cold?


7) If it is 3:15 now, what time will it be in 10 minutes?

8) Shade  $\frac{5}{8}$  of the square.



9) Fill in the chart using the data.

Pet	#
cat	5
dog	8
fish	2



10) Add.

$$\begin{array}{r} 68 \\ + 19 \\ \hline \end{array}$$

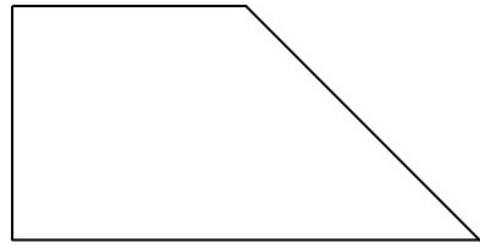
Name: \_\_\_\_\_

1) 100 is the number you get after adding how many tens?

2) I have 16 fewer paperclips than my sister. If she has 33, how many do I have?

3) Write the ordinal number, "second," using a digit.

4) Draw 2 lines to make this shape into 3 equal triangles.



5) What number is missing?

73, 72, 71, 70, \_\_\_\_\_

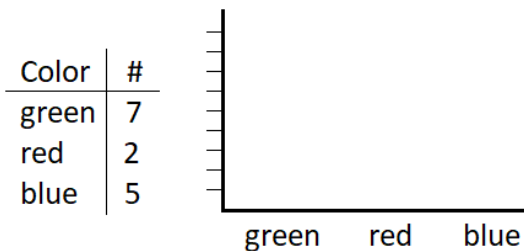
6) What does a scale measure?

7) How much time passes from 4:00 to 4:50?

8) Shade  $\frac{3}{7}$  of this rectangle.



9) Fill in the chart using the data.



10) Find the missing number.

$$400 + \square = 500$$

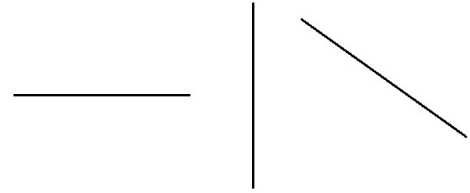
Name: \_\_\_\_\_

1) What do you call 10 tens?

2) The pet store has 64 dogs and 57 cats. How many more dogs than cats are at the store?

3) Write the ordinal number, "third," using a digit.

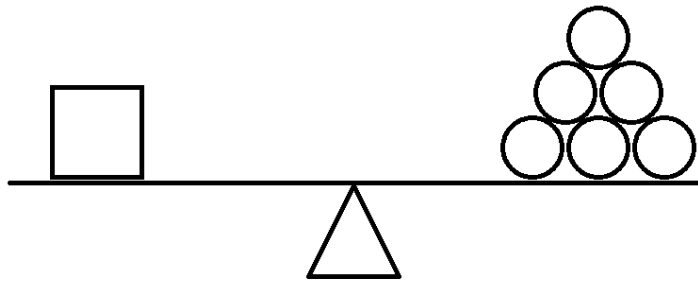
4) Which of these line segments is horizontal?



5) Complete the number pattern:


2, 4, 6, 8, \_\_\_\_\_, \_\_\_\_\_, \_\_\_\_\_

6) If each circle is 1 unit, how many units does the square weigh?



7) What time is noon? (Include am or pm.)

8) Shade  $\frac{4}{4}$  of this shape.



9) Shade the boxes below to match the data.

Day	#
Fri	5
Sat	7
Sun	6

Fri									
Sat									
Sun									

10) Subtract.

$$\begin{array}{r} 46 \\ - 28 \\ \hline \end{array}$$

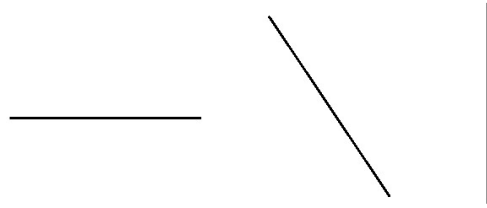
Name: \_\_\_\_\_

1) What number is one more than 99?

2) I have 85 stickers. My sister has 37 more stickers than I have. How many stickers does my sister have?

3) Write the ordinal number, "fifth," using a digit.

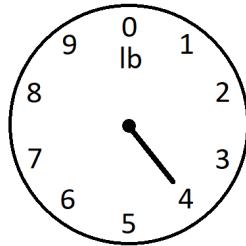
4) Which of these line segments is vertical?



5) Complete the number pattern:

1, 3, 5, 7, \_\_\_\_\_, \_\_\_\_\_, \_\_\_\_\_

6) Read the weight on the scale.



7) How many hours pass from 6 am to noon?

8) What is another way to write  $\frac{2}{2}$ ?

9) Shade the boxes below to match the data.

Sport	#
baseball	12
tennis	8
track	14

baseball																			
tennis																			
track																			

10) Subtract.

$$\begin{array}{r} 73 \\ - 19 \\ \hline \end{array}$$

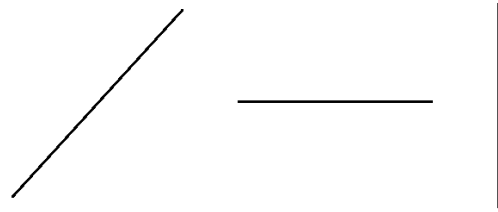
Name: \_\_\_\_\_

1) What number is in the hundreds place of 325?

2) There were 40 apples. I ate 6, then I ate 5 more. Now how many apples are left?

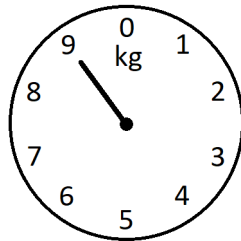
3) Write the ordinal number, "seventeenth," using digits.

4) Which of these line segments is oblique?



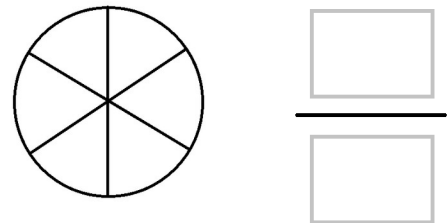
5) Complete the number pattern: \_\_\_\_\_, 92, 94, 96, 98

6) Read the weight on the scale.

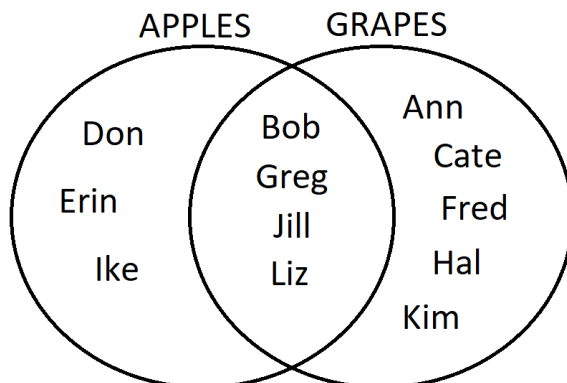


7) How many hours pass from 10 am to 5 pm?

8) Shade one slice then write the fraction.



9) How many kids like apples?

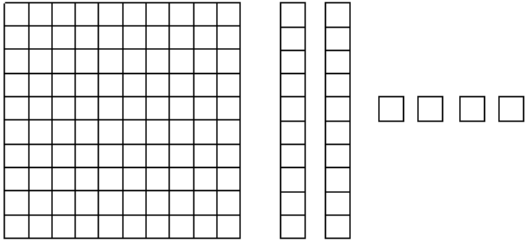


10) Add.

$$5 + 300 + 70 =$$


Name: \_\_\_\_\_

1) How many squares are there?




2) There are 100 pages in my book. I have read 62 pages. How many pages do I have left to read?

3) Circle the 6<sup>th</sup> square from the left.



4) Divide this square into 2 equal pieces using a horizontal line.

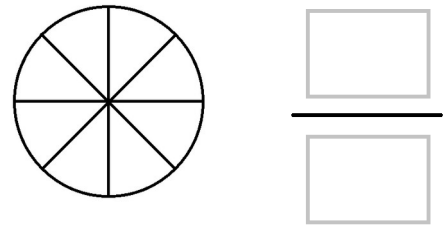


5) Complete the number pattern: **33, 35, 37, 39, \_\_\_\_\_**

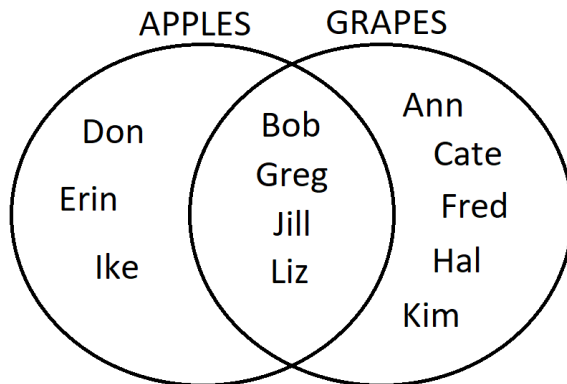
6) What weighs more, a pound or a kilogram?

7) How many days are in a week?

8) Shade 3 slices then write the fraction.



9) How many kids like grapes?

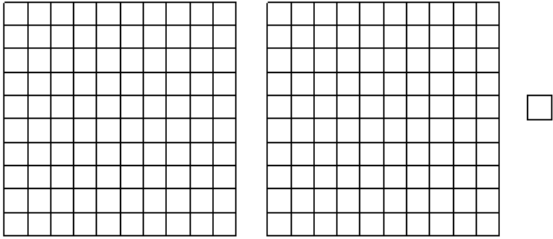


10) What is the value of  $\triangle$  ?

$$800 + \triangle + 2 = 842$$

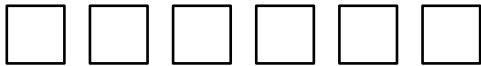
Name: \_\_\_\_\_

1) How many squares are there?




2) I have 50 candies and my sister has 30. We both ate 3 of our candies. Now how many more candies do I have than my sister?

3) Circle the third square from the right.



4) Divide this square into 2 equal pieces using a vertical line.



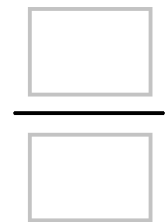
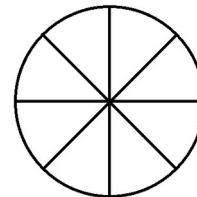
5) What number is added each time?

19, 23, 27, 31

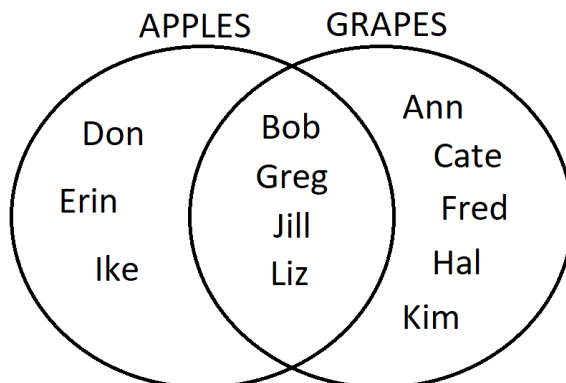
6) How many inches are in a foot?

7) What are the days of the weekend?

8) Shade 5 slices then write the fraction.



9) How many kids like both apples and grapes?

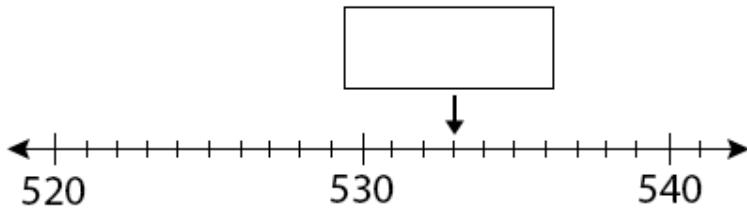


10) Add.

$$\begin{array}{r} 439 \\ + 518 \\ \hline \end{array}$$


Name: \_\_\_\_\_

1) What number is missing?




2) There were 150 balloons at my party. My friends brought 35 more. Now how many balloons are there?

3) Don is \_\_\_\_\_ in line.



4) Divide this square into 2 equal pieces using an oblique line.



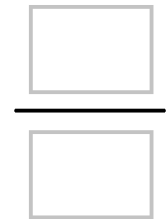
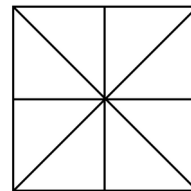
5) Complete the number pattern: 37, 40, 43, 46, \_\_\_\_\_

6) How many inches are in 1 foot 3 inches?

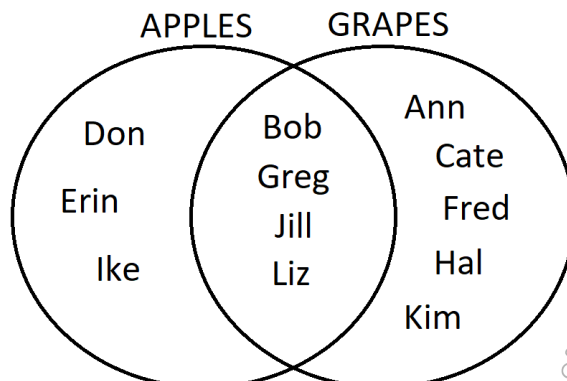
$$1 \text{ ft } 3 \text{ in} = \square \text{ in}$$

7) What are the weekdays?

8) Shade 7 parts then write the fraction.



9) How many kids like apples, but not grapes?



10) Subtract.

$$\begin{array}{r} 816 \\ - 508 \\ \hline \end{array}$$




Name: \_\_\_\_\_

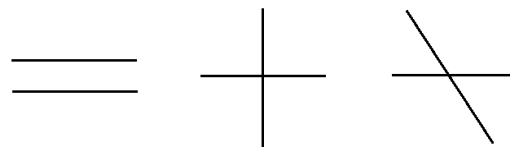
1) Write 529 in expanded form.

2) There are 40 fish in the tank. Fifteen are blue, eighteen are red, and the rest are yellow. How many yellow fish are there?

3) Ben is just after \_\_\_\_\_ in line.



4) Which of these line segments are parallel?



5) What number is subtracted each time?


66, 63, 60, 57

6) Write 16 inches in feet and inches.

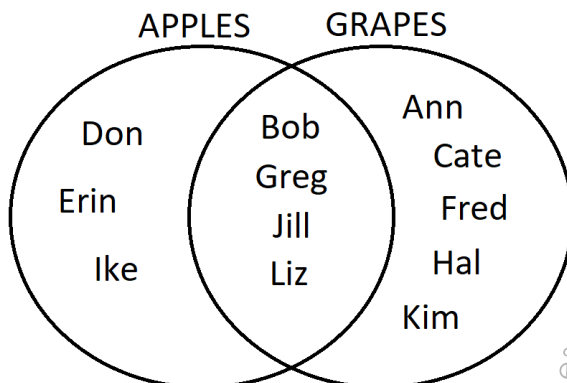
$$16 \text{ in} = \boxed{\phantom{00}} \text{ ft } \boxed{\phantom{00}} \text{ in}$$

7) How many months are in a year?

8) Divide the circle into fourths, then shade  $\frac{1}{4}$ .



9) How many kids like grapes, but not apples?



10) Subtract.

$$\begin{array}{r} 726 \\ - 531 \\ \hline \end{array}$$


Name: \_\_\_\_\_

1) Write the missing comparison symbol.  
( $>$ ,  $<$ , or  $=$ )

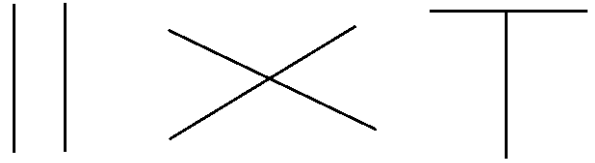
$$430 \square 89$$

2) There were 109 boys and 91 girls at a fair. How many more boys than girls were there?

3) Cat is just before \_\_\_\_\_ in line.



4) Which of these line segments are perpendicular?



5) Complete the number pattern: 82, 78, 74, 70, \_\_\_\_\_

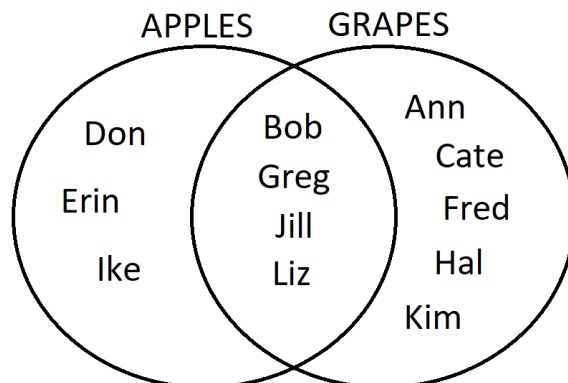
6) How many feet are in a yard?

7) What are the first 3 months of the year?

8) Divide the rectangle into fourths, then shade  $\frac{3}{4}$ .



9) How many kids like apples or grapes (or both)?



10) Subtract.

$$\begin{array}{r} 843 \\ - 157 \\ \hline \end{array}$$

Name: \_\_\_\_\_

1) Write the missing comparison symbol.  
( $>$ ,  $<$ , or  $=$ )

101 ○ 110

2) I gave away 92 cookies and there are 48 left. How many cookies were there to start?

3) What is the tenth letter in this word?

MISSISSIPPI

4) Which of these line segments are parallel?



5) Complete the sequence by counting by 10's:

10, 20, 30, \_\_\_\_\_, \_\_\_\_\_, \_\_\_\_\_


6) How many feet are in 2 yards 1 foot?

2 yd 1 ft =  ft

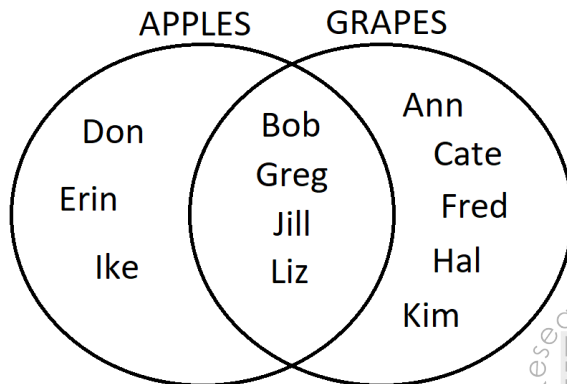
7) What are the second 3 months of the year?

8) Divide the heart into halves then

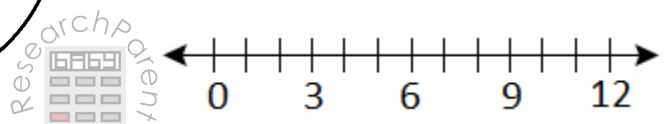
shade  $\frac{2}{2}$ .



9) How many kids do not like apples?



10) Draw jumps along the line to find  $3 \times 4$ .



Name: \_\_\_\_\_

1) Write the missing comparison symbol.  
( $>$ ,  $<$ , or  $=$ )

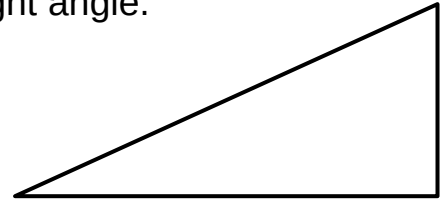
$$99+1 \quad \square \quad 101-1$$

2) I had 80 baseball cards. My dad gave me some more. Now I have 120. How many baseball cards did my dad give me?

3) Cross out the twelfth circle from the left.



4) Draw a small square inside the angle to show which angle is the right angle.



5) Complete the sequence by counting by 5's:


5, 10, 15, \_\_\_\_\_, \_\_\_\_\_, \_\_\_\_\_

6) Write 4 feet in yards and feet.

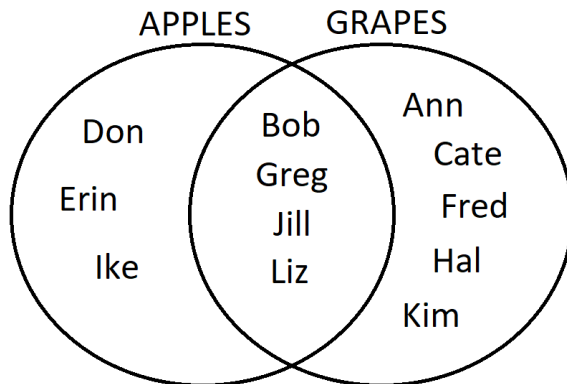
$$4 \text{ ft} = \square \text{ yd } \square \text{ ft}$$

7) What are the third 3 months of the year?

8) Divide the square into eighths, then shade  $\frac{3}{8}$ .



9) How many kids do not like grapes?



10) Multiply.

$$\begin{array}{r} 2 \\ \times 6 \\ \hline \end{array}$$

Name: \_\_\_\_\_

1) Put the numbers 189, 198, and 819 in order from biggest to smallest.

\_\_\_\_\_ > \_\_\_\_\_ > \_\_\_\_\_

2) I had 160 marbles. I gave away 50 and sold 27. How many fewer marbles do I have now?

3) Cross out the fourteen circle from the right.

4) Draw a right triangle.




5) Complete the number pattern: \_\_\_\_\_, \_\_\_\_\_, \_\_\_\_\_, 60, 70, 80

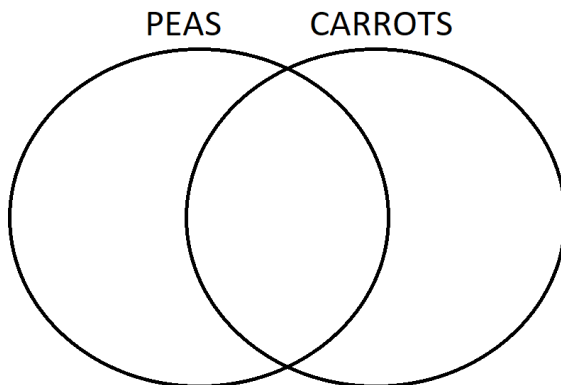
6) How many centimeters are in meter?

7) What are the last 3 months of the year?

8) Shade, then fill in the missing comparison symbol (>, <, or =).



9) Mary likes peas, but not carrots. Where does her name belong in the diagram?




10) Find the missing number.

$$\begin{array}{r} \phantom{x} 2 \\ \phantom{x} \square \\ \times \phantom{00} \square \\ \hline 8 \end{array}$$

Name: \_\_\_\_\_

1) Write a multiplication sentence for this picture.

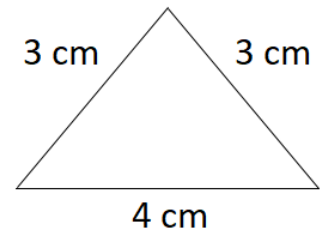


2) I had 133 raspberries. I gave away 70. Then I ate 22. How many raspberries do I have left?

3) What letter is in the top row on the far right?

A	B	C	D	E
F	G	H	I	J
K	L	M	N	O
P	Q	R	S	T

4) What is the perimeter of this shape?




5) Complete the number pattern: 60, 65, 70, \_\_\_\_\_, \_\_\_\_\_, \_\_\_\_\_

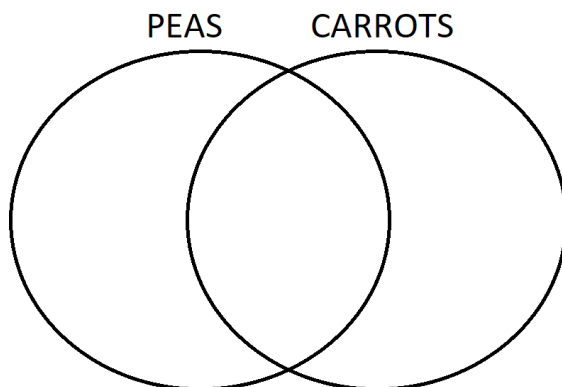
6) How many centimeters equals 3 meters?

7) What are the names of the seasons?

8) Shade, then fill in the missing comparison symbol (>, <, or =).



9) Nick likes carrots, but not peas. Where does his name belong in the diagram?




10) Multiply.

$$\begin{array}{r} 4 \\ \times 6 \\ \hline \end{array}$$

Name: \_\_\_\_\_

1) Write a multiplication sentence for this picture.

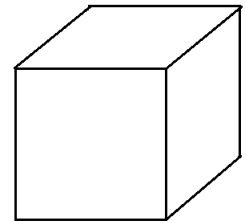


2) My mom has 120 buttons. She has 75 more buttons than zippers. How many zippers does my mom have?

3) What letter is in the bottom row, second from the left?

A	B	C	D	E
F	G	H	I	J
K	L	M	N	O
P	Q	R	S	T

4) What is this geometric solid called?




5) Complete the number pattern: 200, 210, 220, \_\_\_\_\_, \_\_\_\_\_

6) How many centimeters are in 2 meter 50 centimeters?

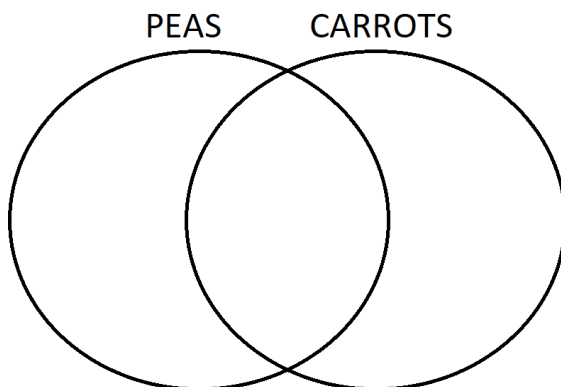
$$2 \text{ m } 50 \text{ cm} = \boxed{\phantom{000}} \text{ cm}$$

7) Write the digital time for 20 past one.

8) Shade, then fill in the missing comparison symbol (>, <, or =).



9) Olivia likes carrots and peas. Where does her name belong in the diagram?



10) Find the missing number.

$$\begin{array}{r} \phantom{0}3 \\ \times \phantom{0} \square \\ \hline 15 \end{array}$$



Name: \_\_\_\_\_

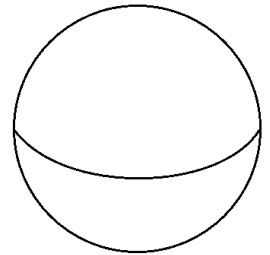
1) Round 61 to the nearest ten.

2) I bought 4 crates of oranges. If each crate has 10 oranges, how many oranges did I get?

3) What letter is in second row on the far left?

A	B	C	D	E
F	G	H	I	J
K	L	M	N	O
P	Q	R	S	T

4) What is this geometric solid called?



5) Skip count by tens:

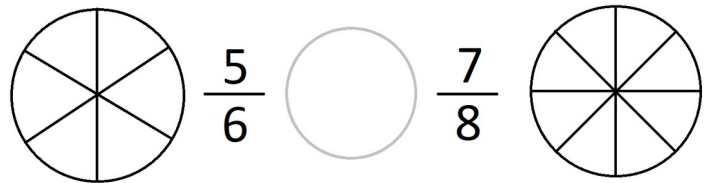
352, 362, 372, \_\_\_\_\_, \_\_\_\_\_

6) How many centimeters are in 4 meter 8 centimeters?

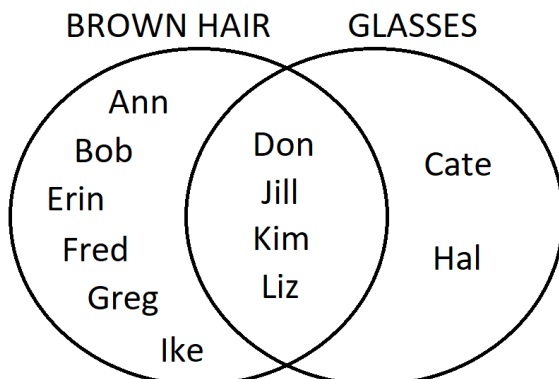
$$4 \text{ m } 8 \text{ cm} = \boxed{\phantom{000}} \text{ cm}$$

7) Write the digital time for 10 till 12.

8) Shade, then fill in the missing comparison symbol.



9) How many people have brown hair?



10) Multiply.

$$\begin{array}{r} 6 \\ \times 10 \\ \hline \end{array}$$



Name: \_\_\_\_\_


1) Round 28 to the nearest ten.

2) If I have 18 plums and I want to put 3 plums in each bag, how many bags do I need?

3) What letter is in the third row, fourth from the right?

A	B	C	D	E
F	G	H	I	J
K	L	M	N	O
P	Q	R	S	T

4) What is this geometric solid called?

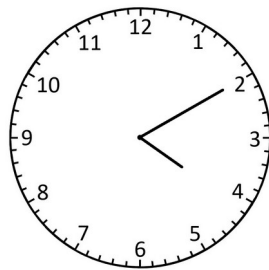


5) Complete the number pattern: 769, 779, 789, \_\_\_\_\_, \_\_\_\_\_

6) Write 720 cm in meters and centimeters.

$$720 \text{ cm} = \boxed{\phantom{00}} \text{ m } \boxed{\phantom{00}} \text{ cm}$$

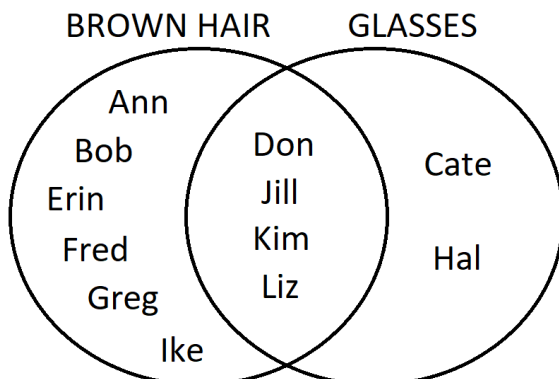
7) Write the digital time that matches the time on the clock face.



8) Write a mixed number to show how many squares are shaded.



9) How many people have glasses?



10) Multiply.

$$\begin{array}{r} 5 \\ \times 5 \\ \hline \end{array}$$

Name: \_\_\_\_\_

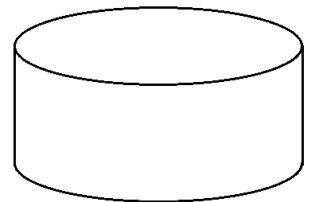
1) Round 45 to the nearest ten.

2) If there are 4 packages of cookies and each package has 6 cookies, how many cookies are there altogether?

3) What letter is in the first row, second from the left?

A	B	C	D	E
F	G	H	I	J
K	L	M	N	O
P	Q	R	S	T


4) What is this geometric solid called?




5) Complete the number pattern: 131, 121, 111, \_\_\_\_\_, \_\_\_\_\_

6) What is bigger, 1 inch or 1 centimeter?

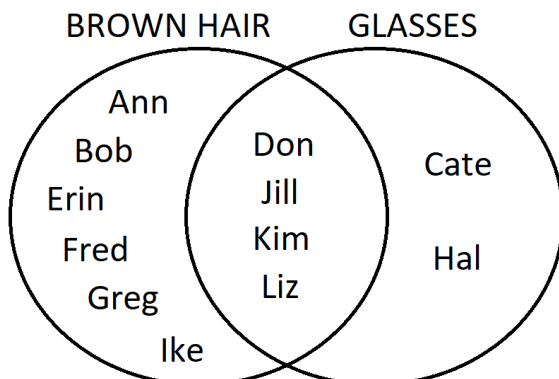
7) Write the digital time that matches the time on the clock face.



8) Write a mixed number to show how many circles are shaded.



9) How many people have brown hair and glasses?



10) Divide.

$$10 \div 2 =$$

Name: \_\_\_\_\_

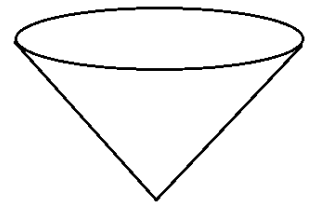
1) One thousand is the number you get by adding how many hundreds?

2) A field contains 22 horses that are either black or brown. If there are 4 more black horses than brown horses, how many black horses are in the field?

3) What letter is in the middle of the fourth row?

A	B	C	D	E
F	G	H	I	J
K	L	M	N	O
P	Q	R	S	T

4) What is this geometric solid called?

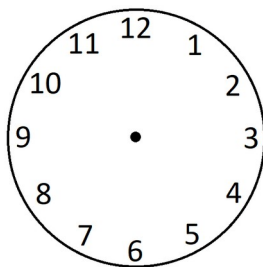


5) Skip count by 100's:


255, 355, 455, \_\_\_\_\_, \_\_\_\_\_

6) Arrange these units from smallest to biggest: in, cm, m, ft

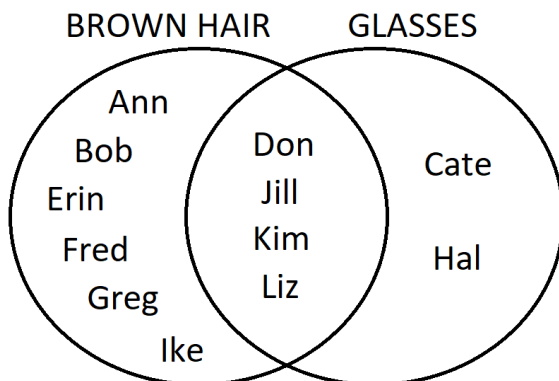
7) Show 9:55 on the clock face.



8) Color 2 1/2 squares.



9) How many people do not have brown hair?



10) What is  $\frac{1}{2}$  of 600?

Name: \_\_\_\_\_

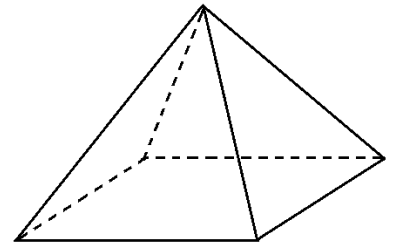
1) What do you call 10 hundreds?

2) A pen has 10 animals. Some are pigs and some are chickens. If there are 24 legs in the pen, how many pigs are there?

3) What letter is fifth from the right in the last row?

A	B	C	D	E
F	G	H	I	J
K	L	M	N	O
P	Q	R	S	T

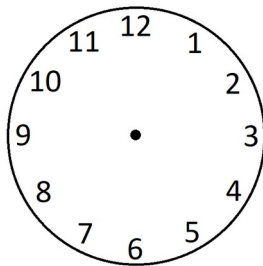
4) What is this geometric solid called?



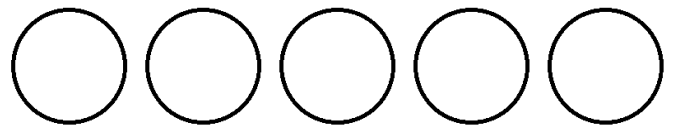
5) Complete the number pattern: 931, 831, 731, \_\_\_\_\_, \_\_\_\_\_

6) How many meters are in a kilometer?

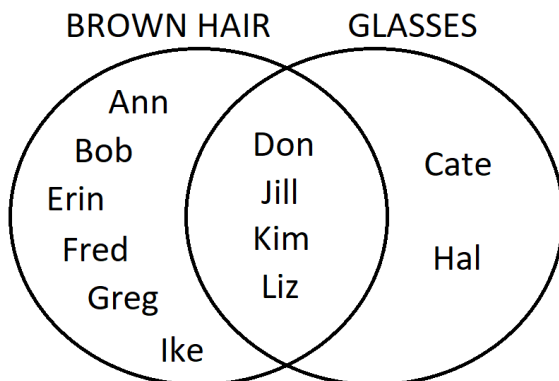
7) Show 3:20 on the clock face.



8) Color 3 1/4 circles.



9) How many people do not have glasses?



10) Divide.

$$18 \div 2 =$$